

Paper Reference 1ST0/2F
Pearson Edexcel
Level 1/Level 2 GCSE (9–1)

Statistics
PAPER 2
Foundation Tier
(Calculator)

Data Booklet

In the boxes below, write your name, centre number and candidate number.

Surname					
Other names					
Centre Number					
Candidate Number					

INSTRUCTIONS

There may be spare copies of some data sheets in case you need them.

THIS DATA BOOKLET *MUST* BE RETURNED WITH THE QUESTION PAPER AT THE END OF THE EXAMINATION.

Contents

Page

4	Question 1
5	Question 1 (Spare copy)
6	Question 2
7	Question 3
8	Question 3 (Spare copy)
9	Question 4(a)
10	Question 4(a) (Spare copy)
11	Question 4(b)
12	Question 7
13	Question 7 (Spare copy)
14	Question 8
15	Question 8 (Spare copy)
16	Question 9
17	Question 10
18	Question 10 (Spare copy)
19	Question 11
20	Questions 11(d), (e) and (f)
21	Questions 11(d), (e) and (f) (Spare copy)
22	Question 12

Question 1

Number of people	Tally	Frequency
1		
2		
3		
4		
5		

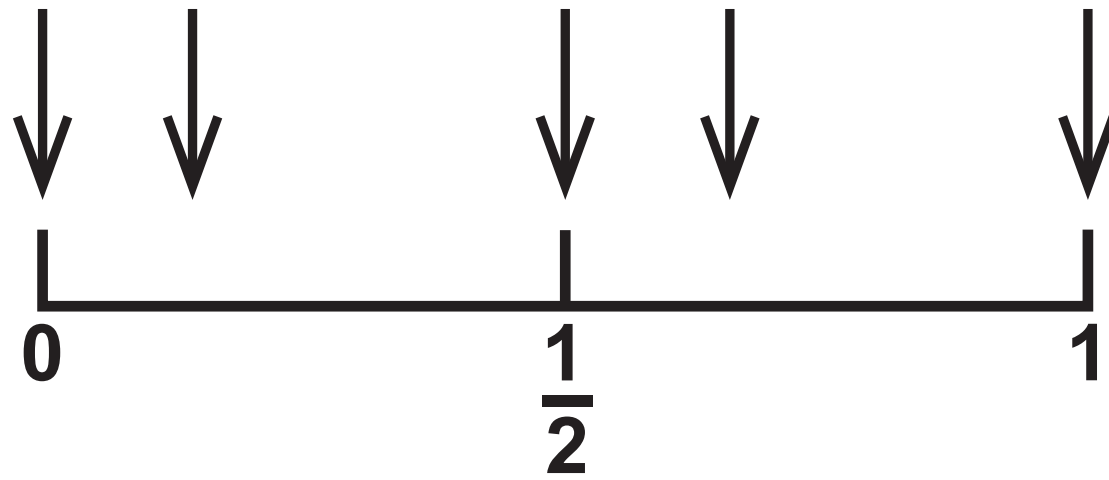
Question 1

Number of people	Tally	Frequency
1		
2		
3		
4		
5		

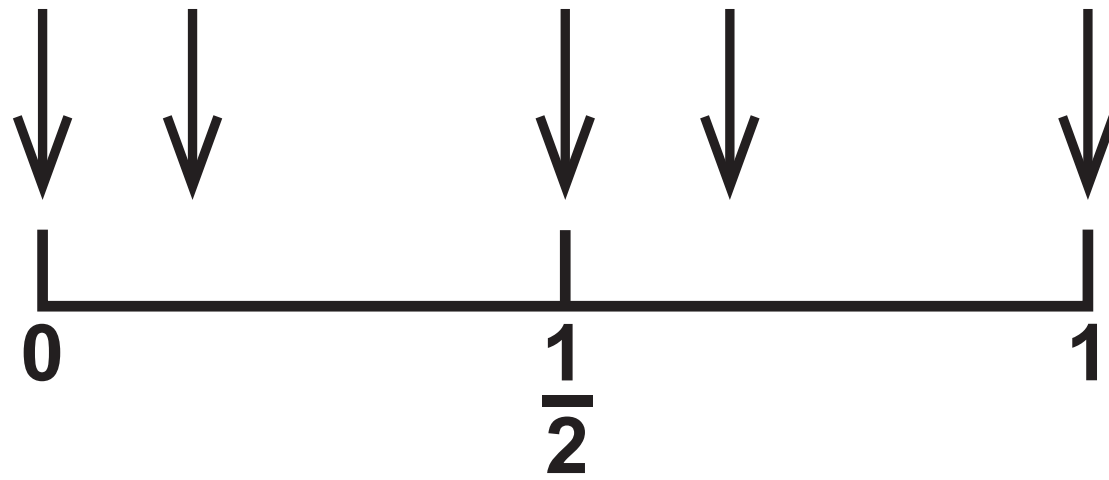
Question 2

Activity	All people	Gender		Age			
		Male	Female	16 – 24	25 – 44	45 – 64	65+
Donated money to charity	40%	38%	43%	26%	39%	44%	48%
Given goods to charity	21%	15%	27%	9%	21%	24%	26%
Sponsored someone for a charity	11%	9%	13%	7%	13%	14%	7%
Bought an ethical product	8%	7%	9%	3%	9%	10%	6%
Volunteered for a charity	6%	5%	8%	5%	6%	8%	5%
Signed a petition	6%	5%	6%	5%	7%	6%	4%
Participated in a local consultation	2%	2%	1%	0%	2%	1%	2%
Participated in a public protest	1%	1%	1%	1%	1%	0%	0%
None of the above	43%	48%	37%	58%	44%	37%	38%

Question 3



Question 3



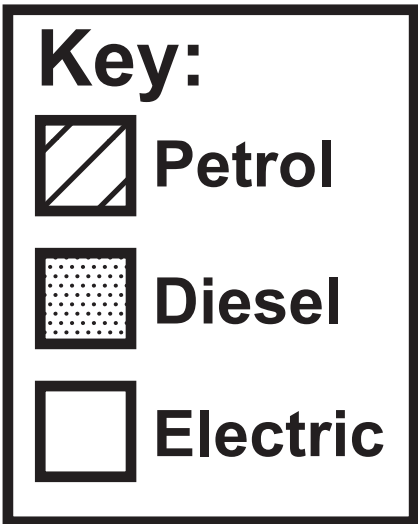
Question 4(a)

	Car type			Total
	Petrol	Diesel	Electric	
Male driver	29		3	50
Female driver		17	1	50
Total	61		4	100

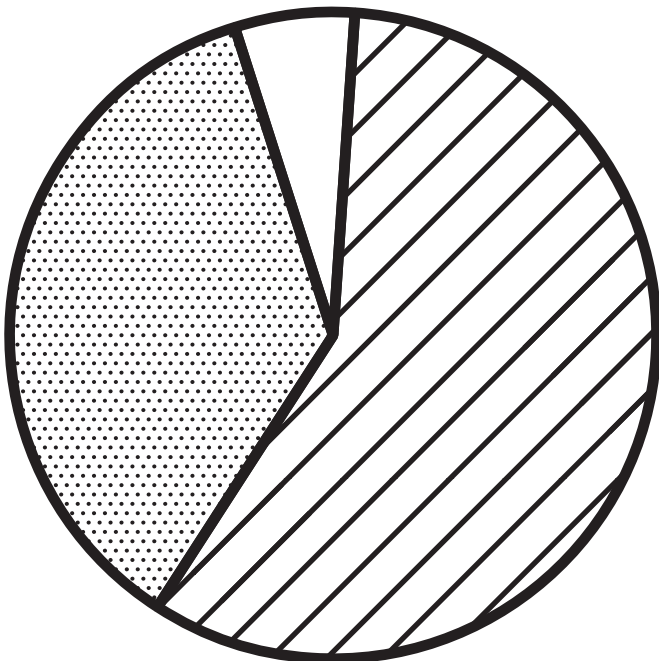
Question 4(a)

	Car type			Total
	Petrol	Diesel	Electric	
Male driver	29		3	50
Female driver		17	1	50
Total	61		4	100

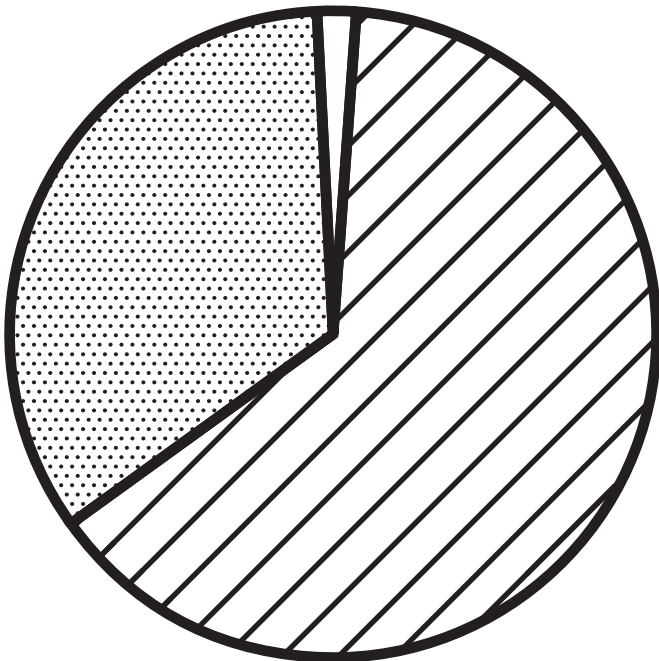
Question 4(b)



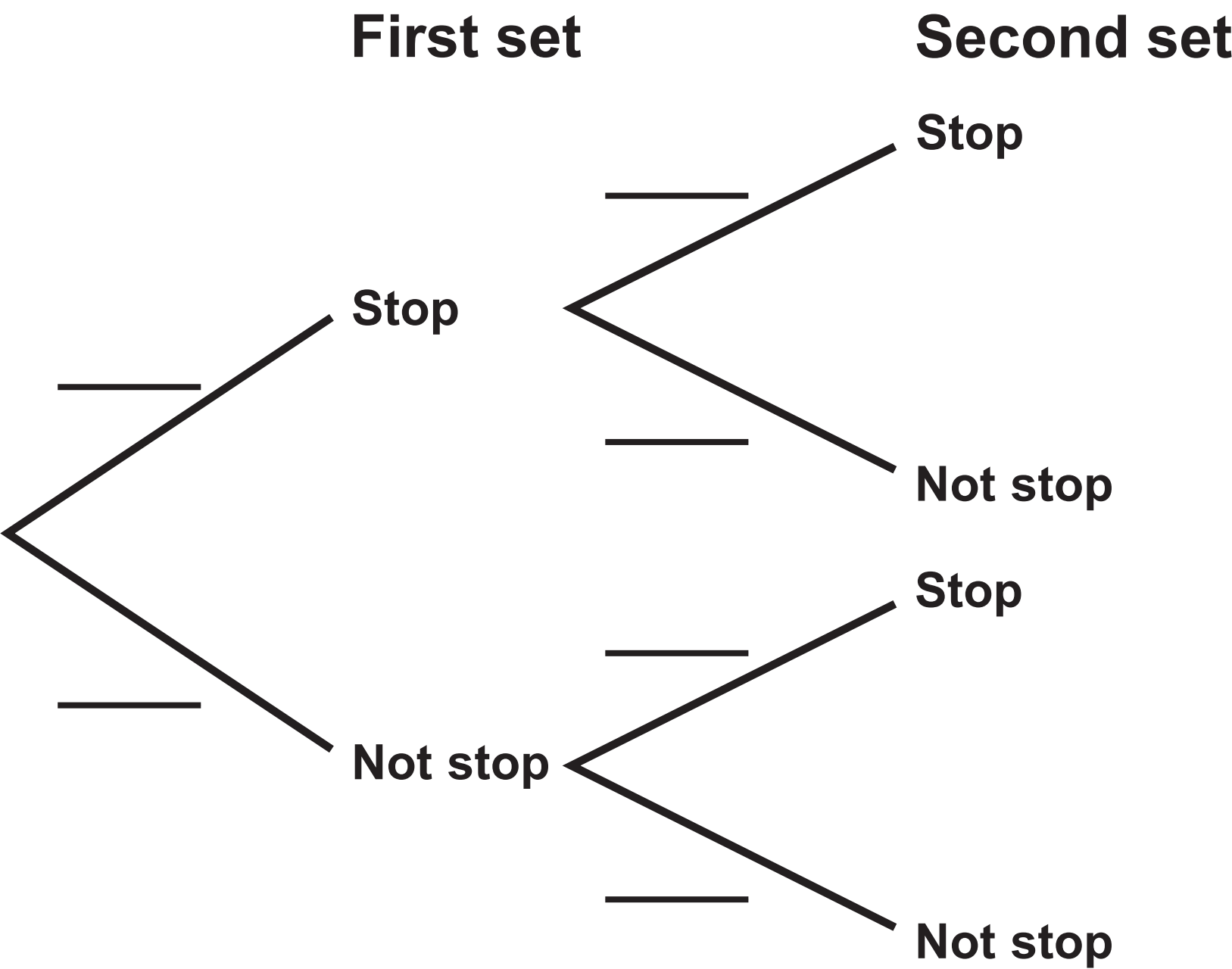
Male drivers



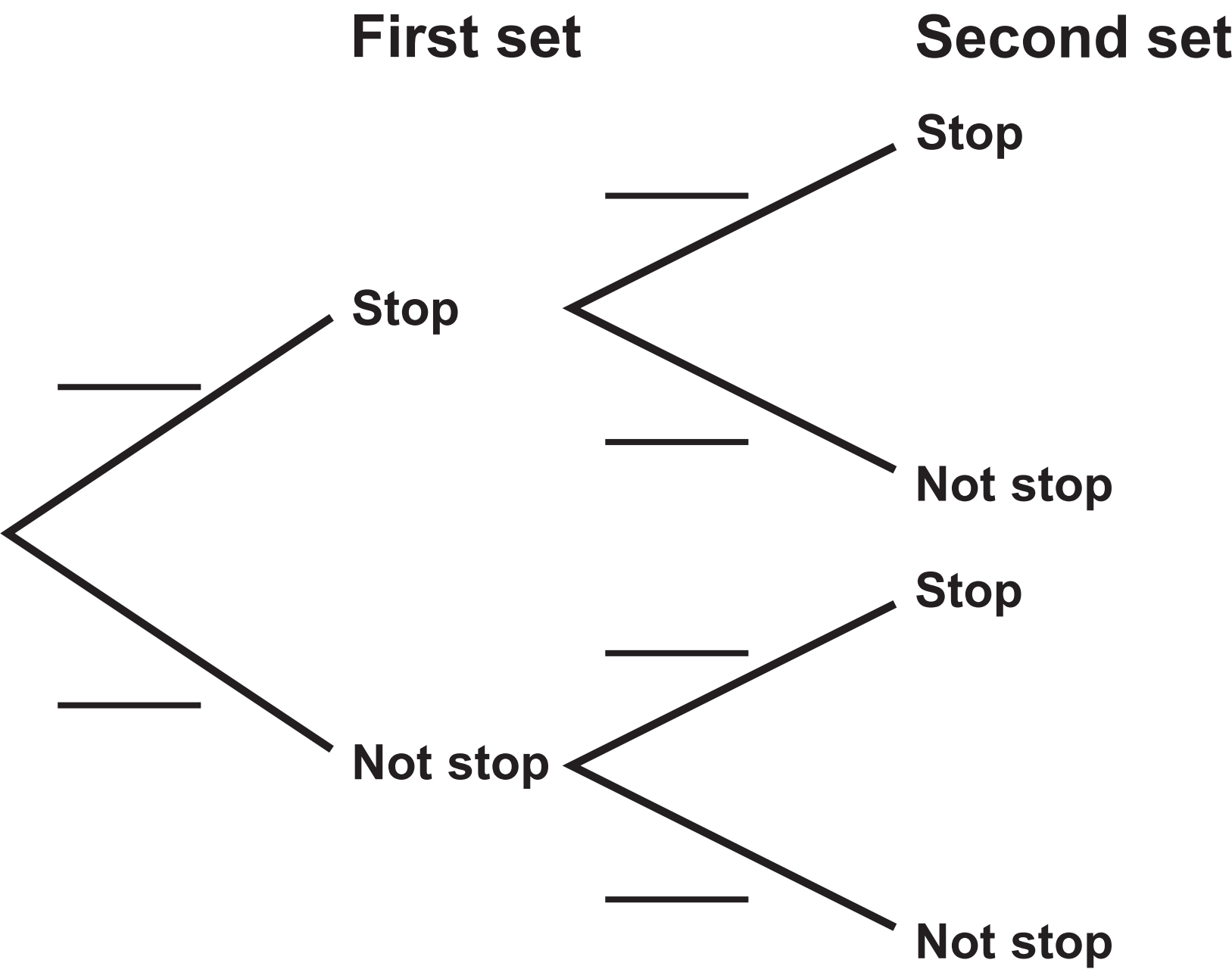
Female drivers



Question 7



Question 7



Question 8

Region	Population (thousands)	Crude birth rate
Cumbria	497·9	9·6
Norfolk	892·9	10·1
United Kingdom	65 648·0	<hr/>

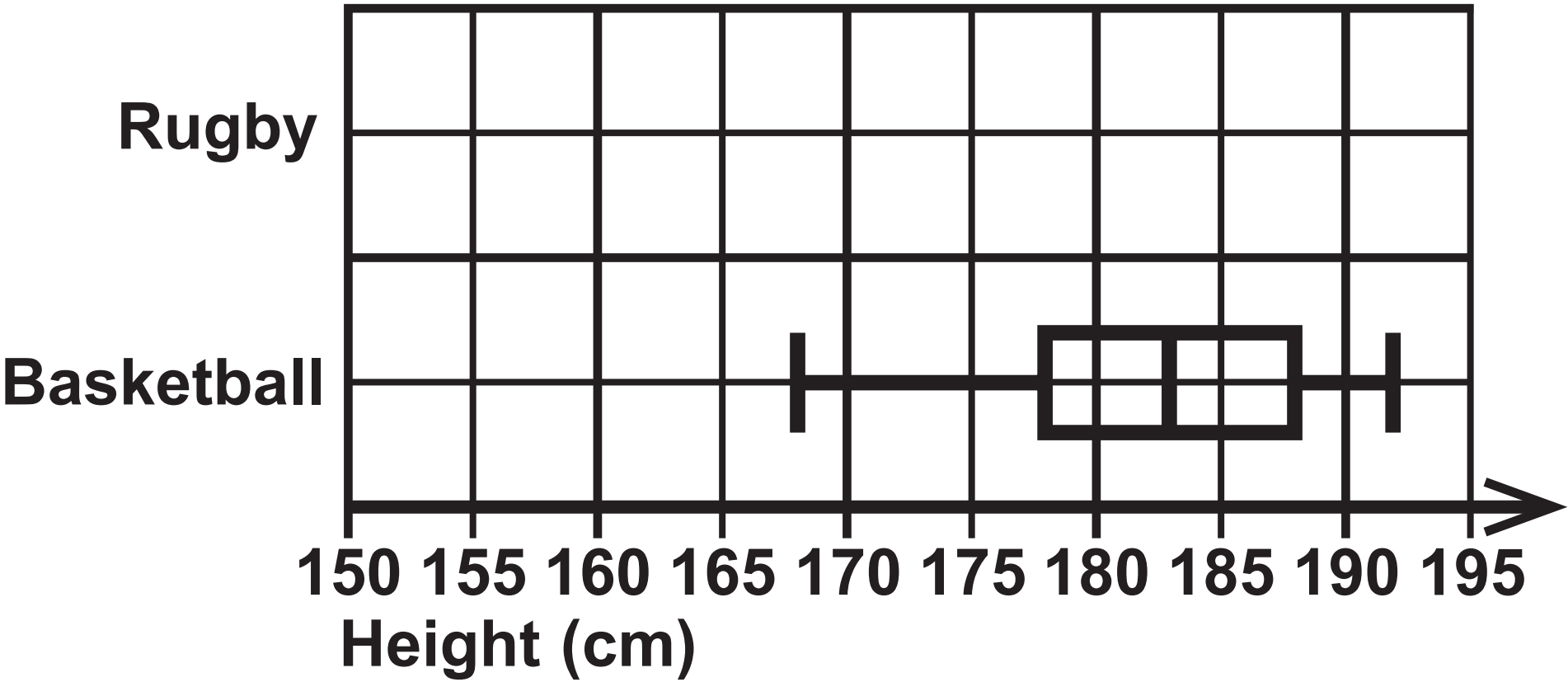
Question 8

Region	Population (thousands)	Crude birth rate
Cumbria	497·9	9·6
Norfolk	892·9	10·1
United Kingdom	65 648·0	<hr/>

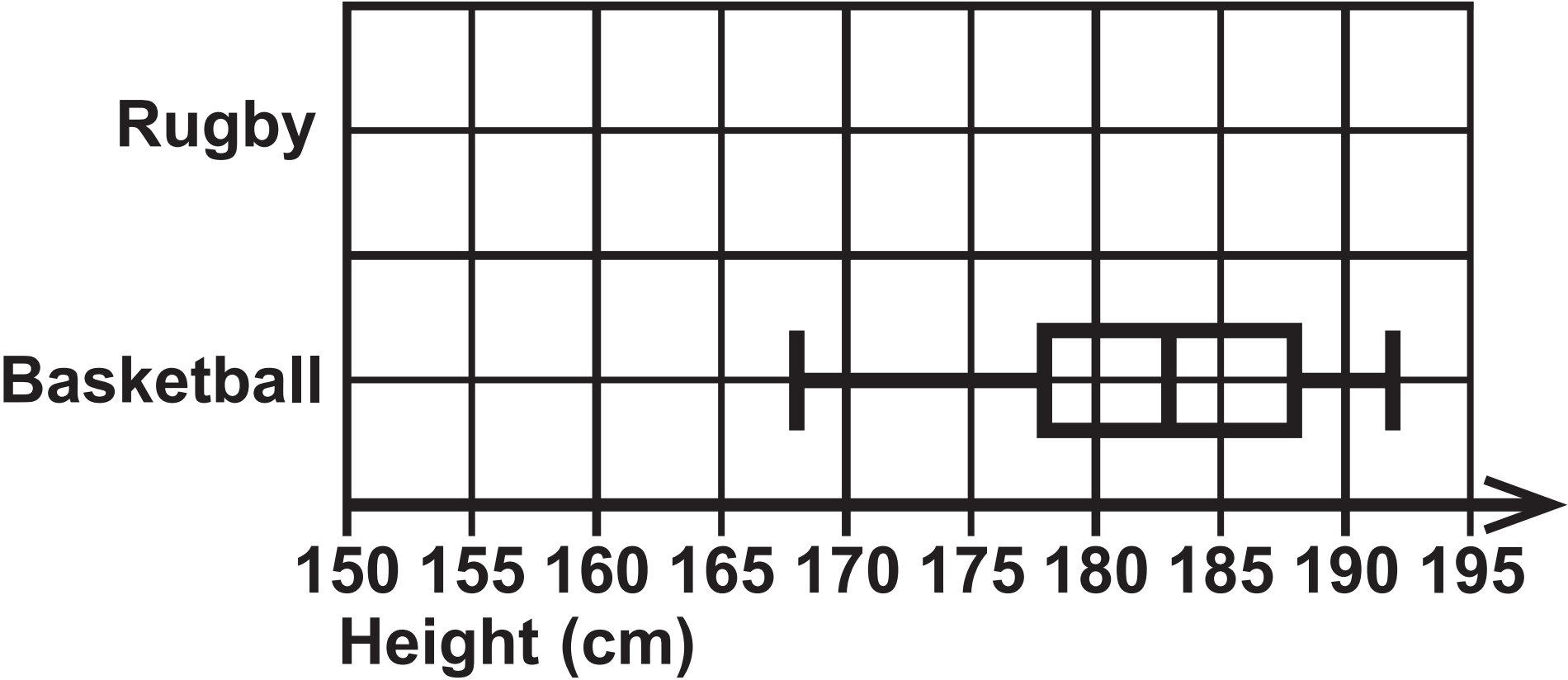
Question 9

Month	Number of days with rainfall
April	9
June	13

Question 10



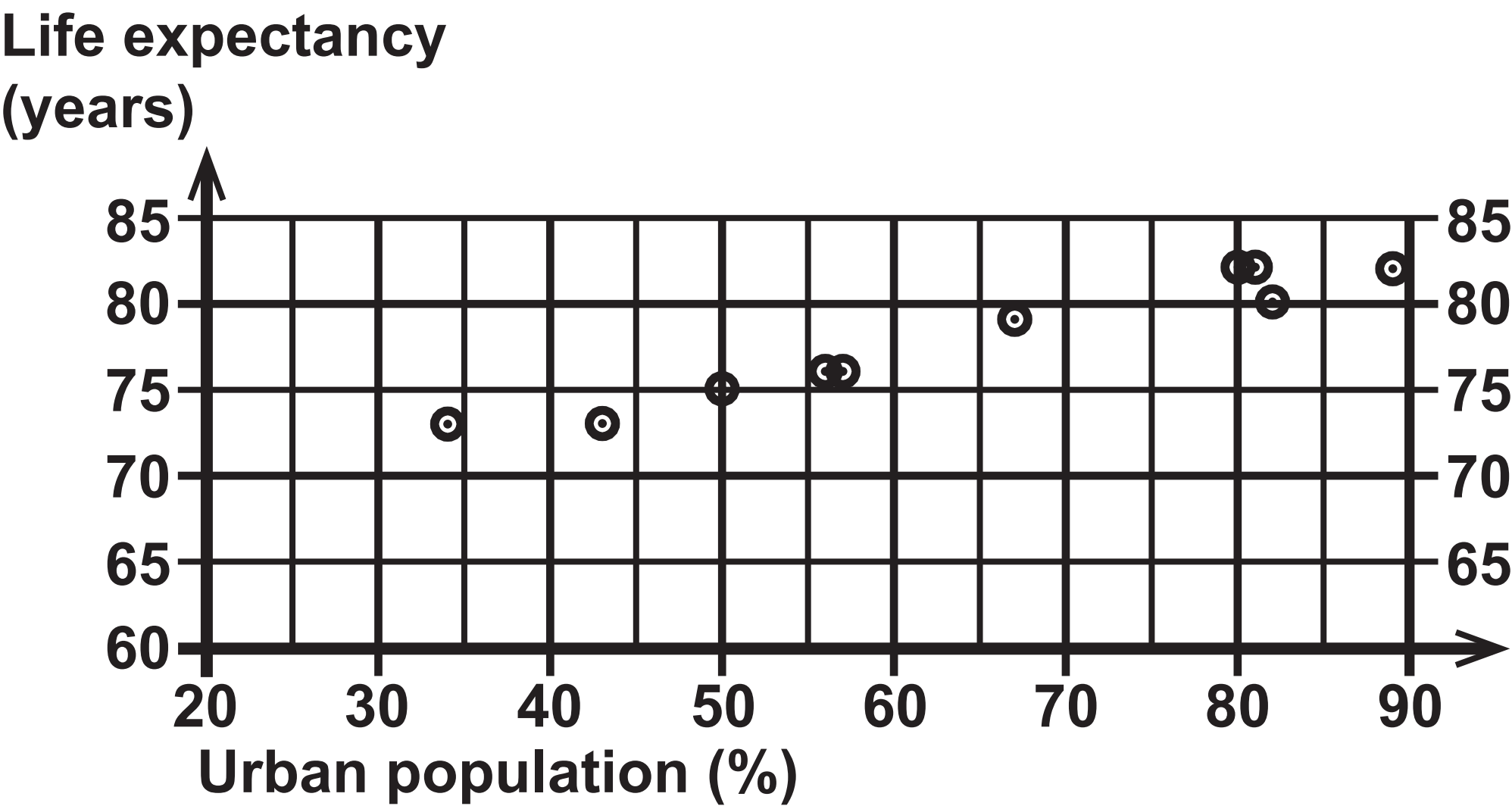
Question 10



Question 11

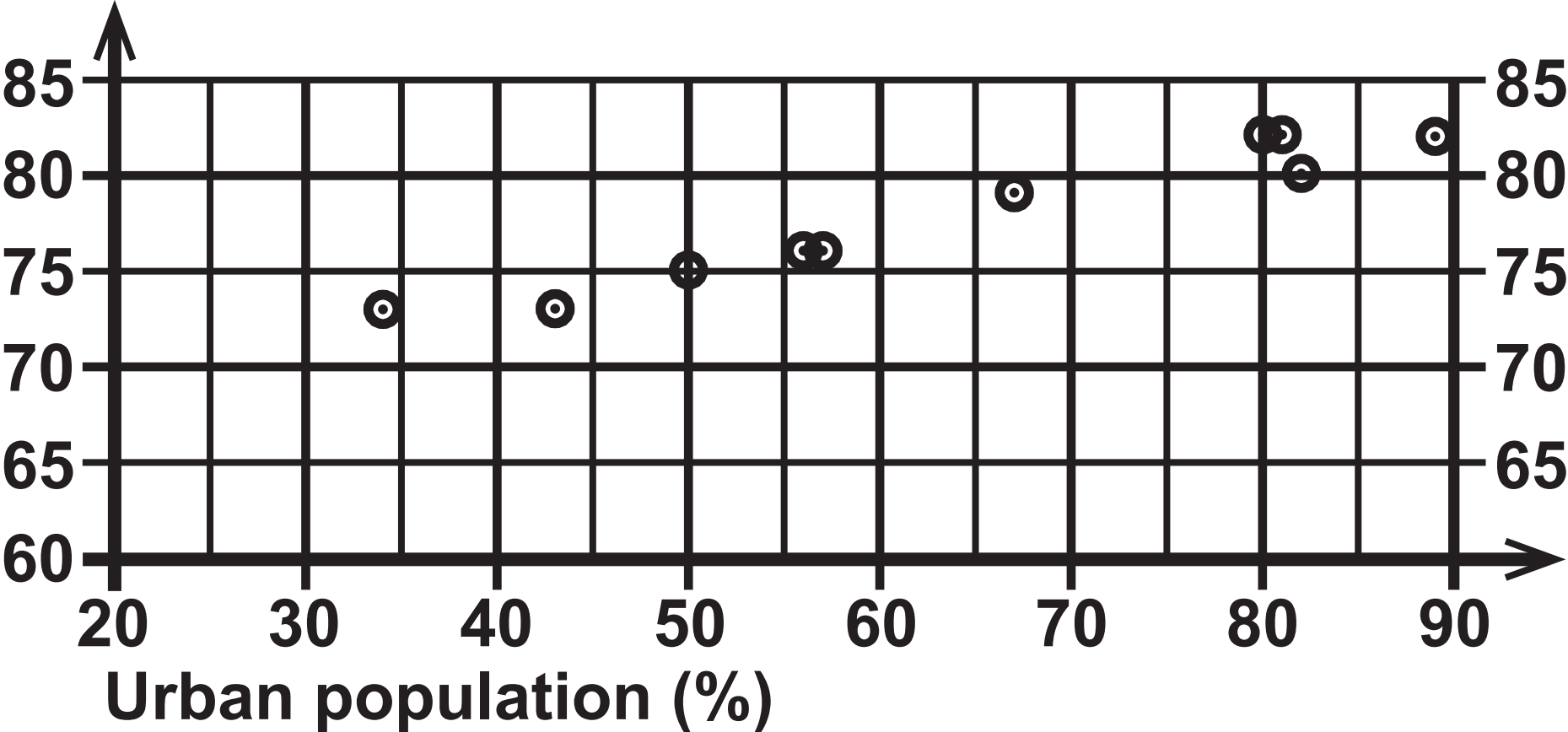
Country	Urban population (%)	Life expectancy (years)
Australia	89	82
Bangladesh	34	73
China	56	76
Egypt	43	73
France	80	82
Macedonia	57	76
Norway	81	82
Panama	67	79
Thailand	50	75
USA	82	80

Questions 11(d), (e) and (f)



Questions 11(d), (e) and (f)

Life expectancy
(years)



Question 12

Year	Index number
2015	100
2018	106·9
2019	110·8

**Source for Question 2:
(Source: UK Giving 2014)**

**Source for Question 8:
(Source: Office for National Statistics)**

**Source for Question 9:
(Source: www.isleofskyewweather.co.uk)**

**Source for Question 10:
(Source: englandrugby.com, gbbasketball.com)**

**Source for Question 11:
(Source: CIA World Factbook)**

**Source for Question 12:
(Source: Office for National Statistics)**